






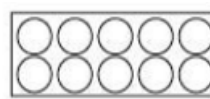


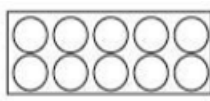


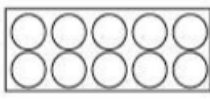


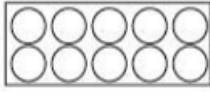


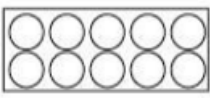





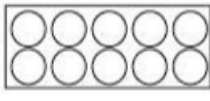





Optellen en aftrekken t/m 10

Reken de sommen uit met behulp van het stappenplan.



Werkblad van:



	+		=	<input type="text"/>	
	-		=	<input type="text"/>	
	+		=	<input type="text"/>	
	-		=	<input type="text"/>	
	-		=	<input type="text"/>	
	+		=	<input type="text"/>	
	-		=	<input type="text"/>	
	-		=	<input type="text"/>	
	-		=	<input type="text"/>	
	+		=	<input type="text"/>	