



Optellen t/m 10



Vul de **erbij-sommen** in en reken ze uit.

Maak gebruik van het stappenplan!

| | | | | | | | | |
|--|--|---|---|----------------------|---|----------------------|---|----------------------|
| | | 3 | = | <input type="text"/> | + | <input type="text"/> | = | <input type="text"/> |
| | | 2 | = | <input type="text"/> | + | <input type="text"/> | = | <input type="text"/> |
| | | 6 | = | <input type="text"/> | + | <input type="text"/> | = | <input type="text"/> |
| | | 1 | = | <input type="text"/> | + | <input type="text"/> | = | <input type="text"/> |
| | | 2 | = | <input type="text"/> | + | <input type="text"/> | = | <input type="text"/> |
| | | 3 | = | <input type="text"/> | + | <input type="text"/> | = | <input type="text"/> |
| | | 1 | = | <input type="text"/> | + | <input type="text"/> | = | <input type="text"/> |
| | | 6 | = | <input type="text"/> | + | <input type="text"/> | = | <input type="text"/> |
| | | 1 | = | <input type="text"/> | + | <input type="text"/> | = | <input type="text"/> |
| | | 2 | = | <input type="text"/> | + | <input type="text"/> | = | <input type="text"/> |























Aftrekken t/m 10



Vul de **eraf-sommen** in en reken ze uit.

Maak gebruik van het stappenplan!

| | | | | | | | | |
|-------------------------------------------------------------------------------------|-------------------------------------------------------------------------------------|---|---|----------------------|---|----------------------|---|----------------------|
|  |  | 3 | = | <input type="text"/> | - | <input type="text"/> | = | <input type="text"/> |
|  |  | 7 | = | <input type="text"/> | - | <input type="text"/> | = | <input type="text"/> |
|  |  | 2 | = | <input type="text"/> | - | <input type="text"/> | = | <input type="text"/> |
|  |  | 4 | = | <input type="text"/> | - | <input type="text"/> | = | <input type="text"/> |
|  |  | 5 | = | <input type="text"/> | - | <input type="text"/> | = | <input type="text"/> |
|  |  | 3 | = | <input type="text"/> | - | <input type="text"/> | = | <input type="text"/> |
|  |  | 8 | = | <input type="text"/> | - | <input type="text"/> | = | <input type="text"/> |
|  |  | 2 | = | <input type="text"/> | - | <input type="text"/> | = | <input type="text"/> |
|  |  | 3 | = | <input type="text"/> | - | <input type="text"/> | = | <input type="text"/> |
|  |  | 4 | = | <input type="text"/> | - | <input type="text"/> | = | <input type="text"/> |