






Werkblad Verdubbelen


- 1) In het linkervak zie je een groepje fiches. Teken rechts nog zo'n groepje.
- 2) Hoeveel is het samen?
- 3) Schrijf de som in het vak erboven.
- 4) Welke vermenigvuldiging hoort erbij?


$3 + 3 = 6$ $2 \times 3 = 6$	
	


$4 + \square = \square$ $2 \times 4 = 8$	
	


$5 + \square = \square$ $2 \times 5 = \square$	
	


$6 + \square = \square$ $2 \times \square = \square$	
	

$\square + \square = \square$ $2 \times \square = \square$	
	

$\square + \square = \square$ $2 \times \square = \square$	
	

$\square + \square = \square$ $\square \times \square = \square$	
	

$\square + \square = \square$ $\square \times \square = \square$	
	

$\square + \square = \square$ $\square \times \square = \square$	
	

$\square + \square = \square$ $\square \times \square = \square$	
